



1.

**Complete the sentences.**

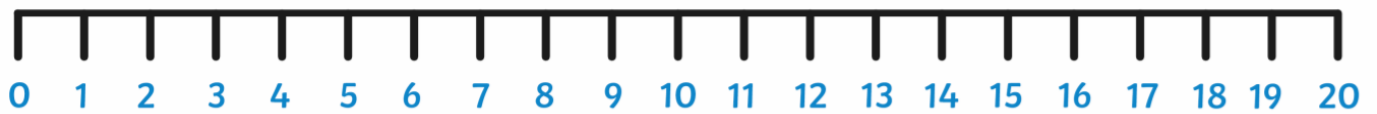
First there were  apples in the basket.



Then  more apples were added.



Now there are  apples in the basket.



2.

**Complete the sentences.**

First there were  apples in the basket.

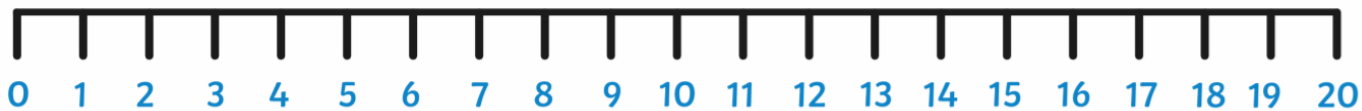


Then  more apples were added.



Now there are  apples in the basket.






3.

Complete the sentences.

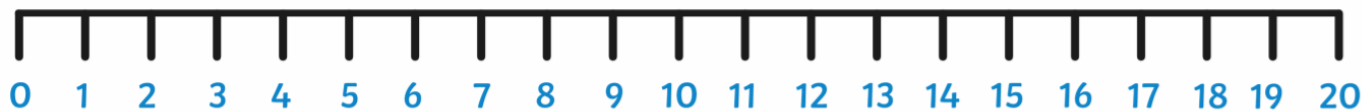

First there were  carrots in the basket.



Then  more carrots were added.




Now there are  carrots in the basket.



4.

Complete the sentences.


First there were  carrots in the basket.



Then  more carrots were added.



Now there are  carrots in the basket.



Write the number sentence.

$$\square + \square = \square$$