


Wednesday 27th January 2021

English

WALT: read and learn the poem '*Wanted*' and to discuss models and drawings of a fantasy building.

Read the poem '*Wanted*', using expression in your voice. Notice the words, 'looking' and 'room'. How does the /oo/ sound change? Did you spot 'mouse' and 'house'? They have the same /ou/ sound. And in 'all' and 'ball', the /a/ is making an /or/ sound. What do you think of the little brown mouse's choices for their house? What would you choose if you could design your own house? If you were building your house after the Great Fire, what materials would you use? What rooms would you have? Draw your dream house below and then explain to your adult what it is you have included in your design.

A large, empty rectangular box with a black border, intended for drawing a dream house. The box is completely blank and occupies the lower half of the page.

Wanted

by Rose Fyleman

I'm looking for a house,
Said the little brown mouse,
With one room for breakfast,
 One room for tea,
 One room for supper
And that makes three.

One room to dance in,
 When I give a ball,
A kitchen and a bedroom,
 Six rooms in all.

Wednesday 27th January 2021

Maths

WALT: make two-digit amounts using coins.

If you go to the shop and buy two items, you'll need to add both amounts together so you know how much you've spent. Choose two items below, write the number sentence and then find the total. Remember, you can partition the numbers into tens and ones, or use column addition, where we put the numbers in columns.


For example: $14\text{p} + 25\text{p} = 39\text{p}$ 14p
 $10\text{p} + 20\text{p} = 30\text{p}$ $25\text{p} +$
 $4\text{p} + 5\text{p} = 9\text{p}$ 39p
 $30\text{p} + 9\text{p} = 39\text{p}$



10p



11p



12p



15p



12p



43p

50p



23p



9p



14p



52p



13p



41p




You will find some squared paper after this page which you can use to set your work out neatly. Remember to put one digit in each box.

Wednesday 27th January 2021

Maths

WALT: make two-digit amounts using coins.



Wednesday 27th January 2021

SPaG


The two characters below are wanted by the police. Can you help by writing a description of each? You must use at least 3 possessive apostrophes for each character. For example, you could write: The girl's hair is long. Colour the pictures in to help you.



Wednesday 27th January 2021

Phonics

Look at the words on the leaves and sound them out. Do you know which ones are real words and which ones are nonsense words? Put a circle around the real words and a square around the nonsense words.



Now choose some of the real words to write in a sentence.

Wednesday 27th January 2021

Science:

WALT: identify and group the uses of everyday materials and record my observations.

Look through the information and then complete the sheet. You might have to go outside for this one!



Out and About

Today we are going to go on a short walk and do our science learning outside!

What must we remember to do to keep ourselves safe?

Keep Your Eyes Peeled

You are going to try to spot different uses of everyday materials. So keep your eyes peeled and look closely.

When you have spotted a material and what it is being used for record it on your sheet.

Material	Use
wood	fence

Grouping Uses

What different uses of materials did you find?
Is there any way we can group some similar uses together?


Unusual Uses

Did you spot any unusual uses of materials?
Why do you think that material was chosen for that purpose?

Wednesday 27th January 2021

Science:

WALT: identify and group the uses of everyday materials and record my observations.

Material	Use
wood 	fence 