

Daily Plan
Friday 29th January

Early Work	Maths 5 a day	Practise your weekly spellings list. (Nouns ending in the suffix -tion.) Write them in bubble writing. You have 10 minutes. Go!
English	Today is spelling test day so practise your spellings using the practise sheet provided. Then get an adult to test you and mark together to see how you did. Did you manage to improve on last week's score?	Complete the Spring Term SPaG Mat 2.
Maths	Go onto the Topmarks maths website. https://www.topmarks.co.uk/maths-games/rocket-rounding Play 'Rocket Rounding'. Numbers up to 9.9 to the nearest whole number. You have 5 mins. Go!	Multiplication Grid Test. Time yourself for 10 minutes and record your time and score in the Homework section of this week's page of your Reading Record. Complete Maths Mat 3.
Vipers	Write a summary of the book so far. Include all of the important information and characters.	
Art	Last week we began our Narnian Winter Wonderland pictures using collage. This week you need to think about what characters you might like to include in your foreground. It may be any of the four children in our story, Mr Tumnus or The White Witch.	You might also like to include the lamp post that is mentioned at the very beginning of the story. You can draw these things on paper in any medium you wish, cut them out and stick them onto the background. We would love to see photographs of them which can be emailed into school!
Spelling/Reading	<p>creation</p> <p>radiation</p> <p>indication</p> <p>ventilation</p> <p>relegation</p> <p>dedication</p> <p>demonstration</p> <p>abbreviation</p> <p>translation</p> <p>vibration</p>	Read for 15 mins with an adult or older sibling and record it in your daily reading record. This could be a book from school or home or a comic. Don't forget to record it in your reading record and get a grown up to sign it. Fantastic work! Did you meet your target of reading 4 times this week? A pat on the back for you if you

Name: _____

Primary 5-a-day

Bronze



29th January

$60 + 100 + 50$

Handwriting practice lines for the addition problem.

63×3

Handwriting practice lines for the multiplication problem.

4


5

1

Using each digit once, make an **even** number

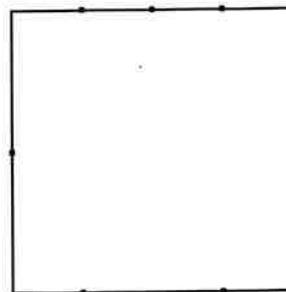
Arrange these temperatures in order, from lowest to highest

5°C 13°C 9°C 3°C



This square has some dots on its sides

Join two dots to divide the square into **two equal parts**.



Look, Say, Cover, Write and Check!

Tick the columns as you follow the instructions from left to right. Make sure you spell the words in the 'write' column. If you spell the word incorrectly, write it again in the correction column.

	look	say	cover	write	check	correction
creation						
radiation						
indication						
ventilation						
relegation						
dedication						
demonstration						
abbreviation						
translation						
vibration						

Year 4 Spring 1 Maths Activity Mat 4

Section 1

Count on.

124, 132,

, ,

Section 2

Calculate:

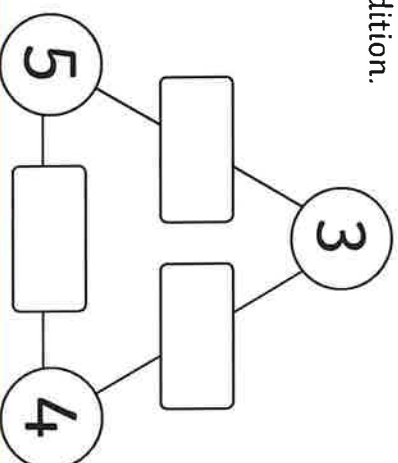
$56 \div 7 =$

$12 \div 1 =$

$24 \div 4 =$

Section 3

Find the missing numbers through addition.



Section 4

There are 240g of coffee in a container. 107g are used. How many grams of coffee are left?

Section 5

Fill in the missing numbers.

$$\frac{3}{4} = \frac{\square}{8}$$

$$\frac{2}{3} = \frac{4}{\square}$$

Section 6

What is the value of the underlined digit as a fraction?

0.4

0.75

Section 7

Count on four steps from $\frac{1}{4}$:

Section 8

Round these decimals to the nearest whole number.

5.3

12.9

Year 4 Spring 1 Maths Activity Mat 1

Section 1

Round these numbers:

	to the nearest 10	to the nearest 100
5248		
972		
2494		

Section 2

Start at 5.

Count back 10.

What number do you reach?

Section 3

Cath earns £2938 each month.

In April, her monthly pay goes up by £1000. How much does she earn now?



Section 4

Write these numbers as Roman numerals:

94

48

63

Section 5

Write a number which is a two-digit number, a multiple of 8, and where the product of its digits is 24.

Section 6

There are 2195 people in a village. 1428 of the people use the village shop at least once a week. How many people do not use the shop regularly?

Section 7

Calculate:

$$11 \times 10 \times 3 =$$

Section 8

Estimate the answer by rounding, then solve the calculation.

$$164 + 87 =$$

Estimation

Actual

Year 4 Spring Term 2 SPaG Mat 2

a Underline the verbs in these sentences and replace them for more ambitious synonyms (words that means the same). Use a thesaurus if you need to.

During the Ice Age, woolly mammoths lived on Planet Earth. They walked around the land eating leaves and other vegetation.



b Can you think of root words which match these definitions when added to the prefix inter-?

From an overseas country.
inter _____


To interrupt to add a comment.
inter _____

c Can you underline all of the determiners in these sentences?

All four boys in the band were determined to impress.




d Write a present progressive sentence about this picture that also has a fronted adverbial. Don't forget your comma.



f Mr Whoops has been juggling with the letters from one of his Year 4 spelling words. Can you spot what it is?

d n r o i r a
y



e Can you unscramble these three possessive pronouns? Use the numbered letters to make another possessive pronoun.

r u s o t e r h i s e s h r

1 2 3

Now, use the possessive pronoun you have made in a direct speech sentence.
