

Wednesday 3rd March 2021

Maths

WALT: Tell the time to nearest quarter on analogue clocks.


We are revisiting telling the time on an analogue clock. This means a clock with hands that show us the hours and the minutes. Remember that the minute hand, usually the longer one, doesn't see the numbers. Only the hour hand, usually the shorter hand, sees the numbers.



clock shows 3 o'clock.



This clock shows half past 3.















This clock shows quarter past 3.



This clock shows quarter to 3.

Visit: <https://www.topmarks.co.uk/time/teaching-clock> and have fun making different times.

Write the correct time under each clock.

 _____	 _____	 _____
 _____	 _____	 _____
 _____	 _____	 _____
 _____	 _____	 _____

Wednesday 3rd March 2021

SPaG

Read each sentence carefully and then decide what's missing. It could be: full stops (.), question marks (?), exclamation marks (!), commas (,) or inverted commas (speech marks) (" "). Use a different coloured pencil to add them.

1. I like reading said Bob
2. Quick, chase the dragon
3. What is your favourite colour asked the fairy
4. The cook needed to buy bread butter honey jam and cream at the shop
5. Isn't that a beautiful painting asked Fred
6. Oh no, I've dropped the egg

Phonics

Read the sentences carefully and work out which /ie/ saying /ee/ word fits from the list underneath.

1. The _____ was in the church.
2. The _____ stole the jewels.
3. The word _____ means very short.
4. The word _____ means very sad.
5. The _____ is in charge.

chief grief thief brief priest

Wednesday 3rd March 2021

Science

WALT: know what plants need to be able to grow.

Visit the website <https://www.bbc.co.uk/bitesize/clips/zcn9j6f> and then have a go at planting your own sunflower seed.