



Year 4 Week 7 Learning Plan
 Week Commencing 22nd February 2021

	Early Morning Work & VIPERS	English	Maths	Foundation Subjects
<p>Monday 22nd Feb</p>	<p>Maths 5 a day</p> <p>Spellings Practise: words with the /s/ sound spelt with 'sc'.</p> <p>Look at the power point slides and familiarise yourself with our 'new' spelling rule. Then can you design your own power point slide to explain the rule?</p> <p>This week our Vipers focus is Predict. Using the sheet provided, answer the questions based on the image.</p>	<p>Write a book review about a good book you have read recently. Why would you recommend it and who to? Include a 'blurb' to tell the reader what it is about and how many stars out of 5 would you give it?</p> <p>or</p> <p>Write about what you got up to in the half term holidays, or even in our 'snow week'! You could present it as a diary or storyboard and include either hand drawn pictures or photos you might have taken. We would love to see what you've been up to so do send them in to our class email address if you're able to.</p>	<p>Go on to https://www.topmarks.co.uk/mathsgames/7-11-years/ordering-and-sequencing</p> <p>Have a go at these games:</p> <p>Place Value Millionaire</p> <p>Higher and Lower</p> <p>Numbers to Words Fruit Splat</p>	<p>Here are your activities/tasks for the foundation subjects; you can work out which day you would like to do them on! But make sure they are done!!</p> <p>Art and Design Technology</p> <p>Over the next two weeks I would like you to design and make a 3 dimensional 'Narnian' wardrobe. This week you need to design it. Draw what it will look like. Will it have a design on the front? Hinges? A mirror? Handle? What materials will you use? If you have any old shoes boxes around the house this might be useful!</p> <p>For inspiration go on https://www.pinterest.ca/pin/109141990940682905/</p>
<p>Tuesday 23rd Feb</p>	<p>Maths 5 a day</p> <p>Spellings Practise on Handwriting Sheet provided.</p> <p>VIPERS: Re-read chapter 1 of The Lion, the Witch and the Wardrobe. Now answer these two questions; What will happen when the children explore the house? What will happen between Lucy and the faun?</p>	<p>Design a holiday brochure that would persuade people to visit Narnia for a holiday. What would it include? What persuasive language would be useful? Have a look at https://www.bbc.co.uk/teach/class-clips-video/how-to-write-a-persuasive-text/zkcfodm.</p> <p>The clip talks about writing a persuasive review but there are aspects mentioned in the clip that can be transferred to a holiday brochure. Take notes as you are</p>	<p>First revise the teaching by looking over the PowerPoint slides for the day. This is on knowing multiplication and division facts for the 9 times table.</p> <p>Review the practice sheet. Answer as many questions as you can. Try the challenge.</p>	

Year 4 Week 7 Learning Plan
Week Commencing 22nd February 2021

		<p>watching. When you are finished write a catchy, biased title and then write your introduction.</p> <p>Today I would like you to write three strong points in separate paragraphs explaining why someone would want to holiday in Narnia. Think about the scenery, what activities they could do there, what food they might enjoy, the reasonable price, etc. Ask an adult if there are any holiday brochures hanging around the house for you to have a look at.</p>	<p>First revise the teaching by looking over the PowerPoint slides for the day. This is on beginning to know multiplication and division facts for the 7 times table.</p> <p>Review the practice sheets. You have a choice of Sheet 1 (easiest), Sheets 2 (medium) and Sheet 3 (most challenging). Select the appropriate one. Complete the practice sheet.</p>	<p>PE: Time for a daily bit of exercise! You could..... Get out in the garden or a public space and do the Daily Mile. Go to the 'Cosmic Yoga' website and enjoy a stretching session! Find a workout by Joe Wicks on YouTube. Play 'Rebound Catch' against a wall if you have a wall where you won't annoy other people with the banging on the wall! Lay 'targets' out and practise aiming in your throwing.</p> <p>Science: Our new topic in science is sound. We are thinking about how sound is made and how it travels. This week you need to go on a sound walk. This can be around your home, in your garden, or even better around your local area. Walk for a short distance then stop and be silent. Listen out for 30 secs for all the noises you hear, record them. Keep repeating this until you have a variety of sounds recorded on your sheet. Next, think about what the terms, 'noise pollution' is referring to. What do you think it means? Discuss this with someone at home.</p> <p>RE: We are continuing with Christianity. This half term we will look at some of</p>
<p>Wednesday 24th Feb</p>	<p>Maths 5 a day Spellings Practise. Look up the meanings of 5 of the words on our list that you are the least familiar with. Use either a dictionary or online dictionary.</p> <p>VIPERS Re-read chapter 2 of The Lion, the Witch and the Wardrobe. Predict; Predict from the title what Lucy did find there What will happen now Lucy is home?</p>			
<p>Thursday 25th Feb</p>	<p>Maths 5 a day Spellings Practise. How many spellings can you write from your list in 5 minutes using the pyramid method? Then complete the Word Search.</p> <p>VIPERS Re-read chapter 3 of The Lion, the Witch and the Wardrobe. Answer these questions; What happens when Edmund gets in the wardrobe? What will the queen do to Edmund?</p>	<p>Edit your work from yesterday using the following success criteria Have you included:</p> <ul style="list-style-type: none"> • A biased title • Clear introduction to state the issue. • Three strong points in separate paragraphs. • Reasons/facts to support points. • Present tense. • Persuasive/emotive language and phrases. • Superlatives, e.g fastest, biggest, most exciting. • Pictures. 	<p>First revise the teaching by looking over the PowerPoint slides for the day. This is on knowing the 11 and 12 times tables.</p> <p>Review the practice sheets. You have a choice of Sheet 1 (easier) or Sheet 2 (harder). Select the appropriate one. Complete the practice sheet. Then ...Have a really good go at the problem solving and reasoning questions. Have you been able to do these?</p>	

Year 4 Week 7 Learning Plan
Week Commencing 22nd February 2021

		<p>You could present your work on Microsoft word or any other software you are familiar with and send it in! 😊</p>		<p>the Christian rites of passage. This week we are looking at Baptism. Read through the story of John the Baptist and discuss why Baptism continues to be an important rite of passage for Christians. You can also watch the story on Youtube: https://www.youtube.com/watch?v=0GMCAaUY4C</p>
<p>Friday 26th Feb</p>	<p>Maths 5 a day Spellings Practise Look, Say, Cover, Write, Check. VIPERS Re-read Chapter 4 from The Lion, the Witch and the Wardrobe. Predict: Will Edmund get his siblings to go to Narnia? What will happen if they do?</p>	<p>Spellings test. Get an adult to test you on your weekly spellings. How did you do? Did you improve on last week's score? Well done if you did! Don't worry if you didn't, keep practising and I'm sure you will do better next week! Please record your score in your reading diary. Complete Spring Term SPaG Mat.</p>	<p>Using the grid provided Test yourself on your times tables. You will need to time yourself for 10 minutes. Go! How did you do? Did you smash it? Record your score in your diary. Complete Spring Term Maths Mat.</p>	<p>Next re-write the story using your own words. You can use the paper provided or be creative and make your own book, comic strip or story board.</p>



22nd February

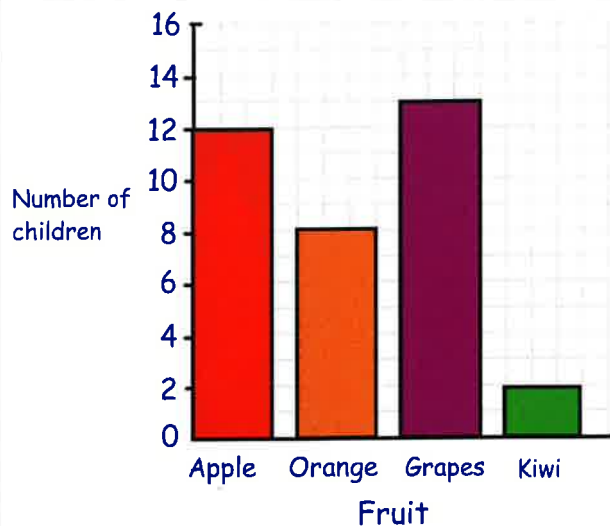
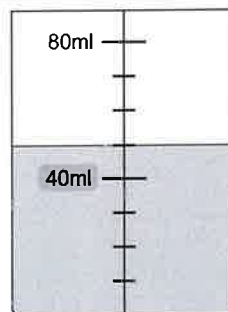
7×5

Handwriting practice lines for the multiplication problem. A rectangular box is provided at the bottom for the answer.

$210 - 25$

Handwriting practice lines for the subtraction problem. A rectangular box is provided at the bottom for the answer.

How much water is in the beaker?



How many children like oranges?

How many children like grapes?



22nd February

$2,500 + 2,500 + 2,500$

$4 \overline{) 852}$

Write down the number which is Five less than three thousand and two.

This table shows the temperature at 7am on three days in December

1st December	8th December	15th December
-1°C	5°C	-3°C

What is the difference between the temperatures on 1st December and 8th December?

On 22nd December the temperature was 6°C lower than on 15th December.

What was the temperature on 22nd December?

Year 4 Term 2B Week 1

Words with the /s/ Sound Spelt with 'sc'

twinkl

The 's' sound can be formed in words using...

's' in socks

'ss' as in hiss

'c' as in ice

But we are looking at another way of making an 's' sound...

science	crescent	discipline	fascinate	scent
scissors	ascent	descent	scientist	scenery

How has the 's' sound been made in these words?

These words contain the 'sc' letter pattern making the 's' sound.

Here are this week's spellings to practise.

science	ascent
crescent	descent
discipline	scientist
fascinate	scenery
scent	
scissors	



Monday 22nd February 2021

Vipers

This week the Viper that we are focussing on is predict. Look closely at the image, think about how it makes you feel and discuss with someone at home what you think will happen next.



- Describe the scene. How does the picture make you feel?
- Do you think the boy knows what lurks beneath the surface?
- What do you think he can see/hear?
- What is the crocodile's character like?
- What will happen next? Continue the story.
- If you could jump into the picture, what would you do? Would you help the boy? How?

Sound Walk

Area Where are you sitting?				
<p>List all the sounds you can hear from this area.</p> <p>Make sure you listen carefully because some of the sounds might be very quiet!</p>				