



5th March

$$4 + 26 = 3 \times \square$$

$$20 \times 40$$

How many days are there in March?



The table shows the temperatures in 4 cities.

| City | Temperature |
|---------|-------------|
| Belfast | 17°C |
| Armagh | 15°C |
| Newry | 14°C |
| Lisburn | 17°C |

Which two cities have the same temperature?

What is the difference in temperature between Newry and Belfast?

The temperature in New York is 15°C hotter than in Lisburn.

What is the temperature in New York?



5th March

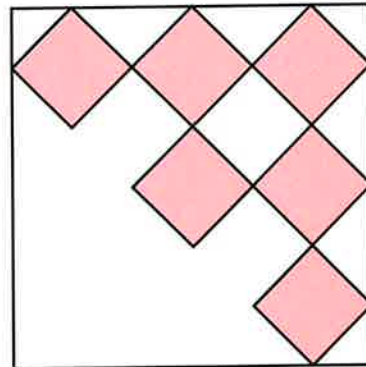
$\frac{4}{5}$ of 30

Handwriting practice lines for the calculation of $\frac{4}{5}$ of 30. A rectangular box is provided at the bottom for the answer.

20,000 – 1,500

Handwriting practice lines for the subtraction of 1,500 from 20,000. A rectangular box is provided at the bottom for the answer.

This square tile has a symmetrical pattern
Draw the line of symmetry on it



The numbers in this sequence increase by 25 each time.

20 45 70 95

The sequence continues in the same way

Which number will be **closest to 250**?

Here is a diagram for sorting numbers

Write one number in each box

One is done for you

| | | |
|---------------------|---------------|---------------------|
| | multiple of 8 | not a multiple of 8 |
| multiple of 7 | | 28 |
| not a multiple of 7 | | |

Look, Say, Cover, Write and Check!

Tick the columns as you follow the instructions from left to right. Make sure you spell the words in the 'write' column. If you spell the word incorrectly, write it again in the 'correction' column.

| | Look | Say | Cover | Write | Check | Correction |
|--------------------|------|-----|-------|-------|-------|------------|
| centre | | | | | | |
| century | | | | | | |
| certain | | | | | | |
| recent | | | | | | |
| experience | | | | | | |
| sentence | | | | | | |
| notice | | | | | | |
| celebrate | | | | | | |
| ceremony | | | | | | |
| certificate | | | | | | |

Look, Say, Cover, Write and Check!

Tick the columns as you follow the instructions from left to right. Make sure you spell the words in the 'write' column. If you spell the word incorrectly, write it again in the correction column.

| | look | say | cover | write | check | correction |
|----------|-------------|------------|--------------|--------------|--------------|-------------------|
| dolphin | | | | | | |
| where | | | | | | |
| sketch | | | | | | |
| unlock | | | | | | |
| football | | | | | | |
| bedroom | | | | | | |
| farmyard | | | | | | |
| | | | | | | |
| | | | | | | |
| | | | | | | |
| | | | | | | |
| | | | | | | |
| | | | | | | |
| | | | | | | |
| | | | | | | |
| | | | | | | |

Year 4 Spring Term 1 SPaG Mat 5

a Add the missing verb to this sentence so that is grammatically correct.

Standing outside the hospital, the doctor _____ preparing herself for her first day in her new job.

c Which of these sentences is missing an apostrophe? Where should it go?

- Its going to snow next week.
- Its large, slithering body was covered in scales.

b Can you insert a plural possessive apostrophe in the correct place in this sentence?

T h e t r e e s l e a v e s
w e r e c o v e r e d
w i t h s n o w.

d

Mr Whoops has got in a terrible muddle with his 'ch' words that sound like a /k/. Can you help him to match each definition with the correct word?

- the repeating part of a song → c _____
- a repeating sound inside a cave → e _____

e

Underline the subordinate clause in this sentence.
When the winter arrived, the bear hibernated in its cosy den.

f

Sort these words into the table:

| determiner | pronoun |
|------------|---------|
| | |

- we
- they
- an
- all

Year 4 Spring Term 1 SPaG Mat 5 Answers

5

a Add the missing verb to this sentence so that is grammatically correct.

Standing outside the hospital, the doctor is/was preparing herself for her first day in her new job.

c Which of these sentences is missing an apostrophe? Where should it go?

It's going to snow next week.
Its large, slithering body was covered in scales.

b Can you insert a plural possessive apostrophe in the correct place in this sentence?

The trees' leaves were covered with snow.

d Mr Whoops has got in a terrible muddle with his 'ch' words that sound like a /k/. Can you help him to match each definition with the correct word?

the repeating part of a song → chorus
a repeating sound
inside a cave → echo

e Underline the subordinate clause in this sentence.

When the winter arrived, the bear hibernated in its cosy den.

f Sort these words into the table:

| determiner | pronoun |
|------------|---------|
| an | we |
| all | they |

we they an all

Year 4 Spring Term 1 SPaG Mat 5

a Add the missing verb to this sentence so that is grammatically correct.

Standing outside the hospital, the doctor _____ preparing herself for her first day in her new job.
Rancaster Hospital _____ given her a job in their surgical ward.

c One of these sentences needs the contracted apostrophe word 'It's' and the other needs the possessive pronoun 'Its' – which is which?

_____ going to snow next week.
_____ large, slithering body was covered in scales.

e Rewrite this sentence and add a subordinate clause.

The bear hibernated in its cosy den.

b Can you write a sentence containing a plural possessive apostrophe about the snow that is on the leaves of the tree?

d Mr Whoops has got in a terrible muddle with his 'ch' words that sound like a /k/. Can you help him to match each definition with the correct word?

the repeating part of a song → c _____
a repeating sound inside a cave → e _____
a person in a story or film → c _____

f Sort these words into the table:

| determiner | pronoun |
|------------|---------|
| | |

we **they** **an** **all**

Add another word to each column.



Year 4 Spring Term 1 SPaG Mat 5 Answers

a Add the missing verb to this sentence so that is grammatically correct.

Standing outside the hospital, the doctor is/was preparing herself for her first day in her new job.
Rancaster Hospital has/had given her a job in their surgical ward.

c One of these sentences needs the contracted apostrophe word 'It's' and the other needs the possessive pronoun 'Its' - which is which?

It's going to snow next week.
Its large, slithering body was covered in scales.

e Accept any correctly - punctuated sentence with a subordinate clause either before or after the main clause, e.g. When the winter arrived, the bear hibernated in its cosy den. OR The bear hibernated in its cosy den when the winter arrived.

b Can you write a sentence containing a plural possessive apostrophe about the snow that is on the leaves of the tree?

Accept any plural possessive apostrophe sentence, e.g. The trees' leaves were covered with snow.

d Mr Whoops has got in a terrible muddle with his 'ch' words that sound like a /k/. Can you help him to match each definition with the correct word?

the repeating part of a song → chorus
a repeating sound inside a cave → echo
a person in a story or film → character

f Sort these words into the table:

| determiner | pronoun |
|------------|---------|
| an | we |
| all | they |

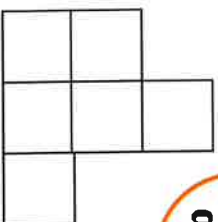
Accept any determiners and pronouns added to the correct column.



Year 4 Maths Activity Mat 1 Spring 2

①

Work out the area of this shape.



a

A pie weighs 1200g.

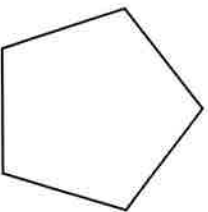
A larger pie weighs 735g more.

What is the weight of the larger pie in grams?

b

What would this be in kilograms and grams?

Draw all the lines of symmetry. How many lines of symmetry does the shape have?



c

Write these fractions as decimals.

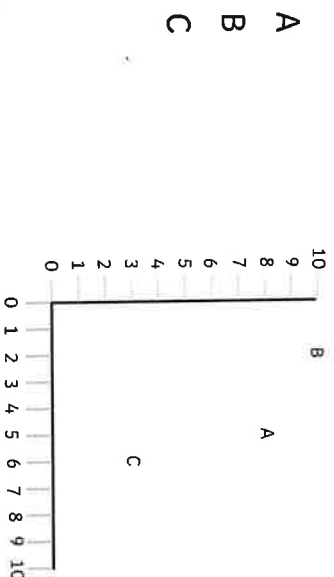
$$\frac{78}{100}$$

$$\frac{29}{100}$$

$$\frac{6}{10}$$

d

Write the coordinates for:



e

How many minutes are left in the hour if the time is:

$$4.25$$

$$11.40$$

$$9.10$$

f

Solve the following using column multiplication.

$$\begin{array}{r} \pounds \\ 7.5 \\ \times 8 \\ \hline \end{array}$$

$$\begin{array}{r} \times \\ \pounds \\ \hline \end{array}$$

$$\begin{array}{r} \pounds \\ \hline \end{array}$$

$$\begin{array}{r} \pounds \\ 6.9 \\ \times 7 \\ \hline \end{array}$$

$$\begin{array}{r} \times \\ \pounds \\ \hline \end{array}$$

$$\begin{array}{r} \pounds \\ \hline \end{array}$$

g

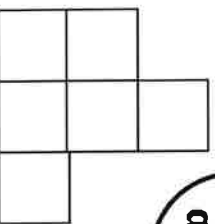
$$\boxed{} \times 5 + 8 = 68$$

$$30 + 3 \times \boxed{} = 50$$

h

Year 4 Maths Activity Mat 1 Spring 2 Answers

Work out the area of this shape.



6cm²

a

A pie weighs 1200g.

A larger pie weighs 735g more.

What is the weight of the larger pie in grams?

1935g

What would this be in kilograms and grams?

1kg 935g

b

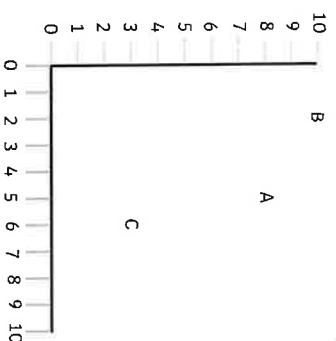
Write these fractions as decimals.

$$\frac{78}{100} \quad \mathbf{0.78} \quad \frac{29}{100} \quad \mathbf{0.29} \quad \frac{6}{10} \quad \mathbf{0.6}$$

d

Write the coordinates for:

- A (5,8)
- B (2,10)
- C (6,3)



e

How many minutes are left in the hour if the time is:

- 4.25 **35 minutes**
- 11.40 **20 minutes**
- 9.10 **50 minutes**

f

Solve the following using column multiplication.

$$\begin{array}{r} \text{£} \quad 7.5 \quad 8 \\ \times \quad 2 \\ \hline \end{array}$$

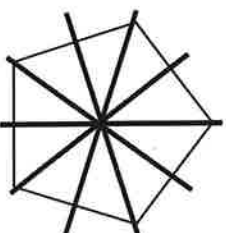
$$\begin{array}{r} \text{£} \quad 15.1 \quad 6 \\ \times \quad 2 \\ \hline \end{array}$$

$$\begin{array}{r} \text{£} \quad 6.9 \quad 7 \\ \times \quad 3 \\ \hline \end{array}$$

$$\begin{array}{r} \text{£} \quad 20.9 \quad 1 \\ \times \quad 2 \\ \hline \end{array}$$

g

Draw all the lines of symmetry. How many lines of symmetry does the shape have?



c

$$\begin{array}{r} \boxed{12} \times 5 + 8 = 68 \\ 30 \div 3 \times \boxed{5} = 50 \end{array}$$

h